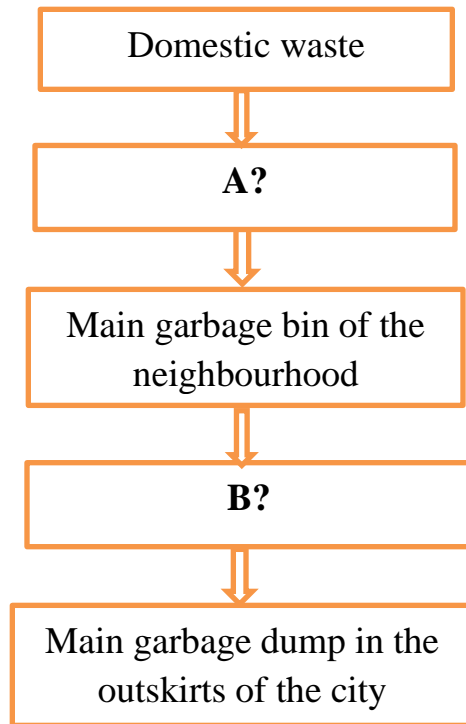




5. In the following flowchart of garbage disposal find the missing steps A and B.



1. B- Garbage collector, A- Dustbin
2. A- Truck sent by Municipal Corporation, B- Garbage collector
3. B- Dustbin, A- Garbage collector
4. A- Garbage collector, B- Truck sent by Municipal Corporation

6. Sometimes, big holes appear on the teeth. They cause a lot of toothache. These are called\_\_\_\_\_.

- |                |               |
|----------------|---------------|
| a) Taste buds  | c) Milk teeth |
| b) False teeth | d) Cavities   |

**II. There are two statements marked as Assertion (A) and Reason (R). Mark your answer as per the options provided below: (1×2=2)**

1. **Assertion (A):** The twigs of neem tree are very good for the health of our teeth.  
**Reason (R):** The medicinal properties of neem help to stop bacteria.

- a. Both Assertion (A) and Reason (R) are true and Reason (R) is the correct explanation of Assertion (A).
- b. Both Assertion (A) and Reason (R) are true and Reason (R) is not the correct explanation of Assertion (A).
- c. Assertion (A) is true but Reason (R) is false.
- d. Assertion (A) is false but Reason (R) is true.

2. **Assertion (A):** Kabadiwallas play an important role in recycling  
**Reason (R):** It is important to dispose waste carefully

- a. Both Assertion (A) and Reason (R) are true and Reason (R) is the correct explanation of Assertion (A).
- b. Both Assertion (A) and Reason (R) are true and Reason (R) is not the correct explanation of Assertion (A).
- c. Assertion (A) is true but Reason (R) is false.
- d. Assertion (A) is false but Reason (R) is true.

**III. Define:**

**(1×2= 2)**

- a. Gobar gas
- b. Recycling loop

**IV. Answer the following:**

**(2×2= 4)**

- 1. Differentiate between biodegradable and non-biodegradable waste. (2 points each)
- 2. Draw a labelled diagram of the tongue showing the taste buds.

**V. Answer in detail:**

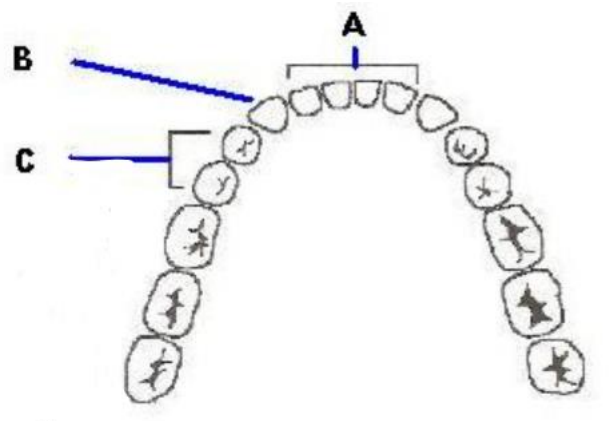
**(3×2=6)**

- 1. **Read the passage and answer the questions related to it.**

**Teeth helps us to bite, cut and chew different types of food. They also help in speaking. There are two sets of teeth in humans in lifetime. Children have milk teeth while adults have permanent teeth.**

- a. How many permanent teeth do adults have?
- b. What are third molars?
- c. Write any two ways to keep our teeth healthy and strong

2. Label the diagram of the teeth A, B and C and state the functions of the same.





**INDIAN SCHOOL SOHAR**  
**PERIODIC TEST- II (2022-23)**  
**SUBJECT: EVS**  
**CLASS – IV**

**SET –B**

**Date of Exam: 17-01-23**

**Time Allotted: 40 minutes**

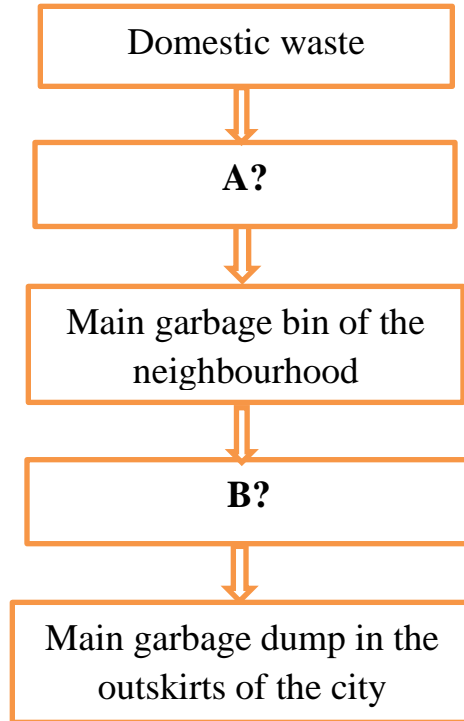
**Max. Marks: 20**

**I. Choose the correct option:**

**(1×6=6)**

- 
1. What is the type of waste such as banana peels, vegetable peels and egg shells?
    - a) Non-biodegradable waste
    - b) Gobar gas
    - c) Biodegradable waste
    - d) Cow dung
  
  2. Paper is made from trees. The advantage of recycling paper is\_\_\_\_\_.
    - a) It increases the number of trees being cut.
    - b) It reduces the number of trees being cut.
    - c) It causes bad smell
    - d) It causes pollution.
  
  3. Old people have sunken faces as they do not have teeth. What role do the teeth play in addition to chewing food?
    - a) teeth help to swallow food
    - b) teeth help to taste food
    - c) teeth give shape to our face
    - d) teeth help to move the food inside the mouth.
  
  4. The meaning of the word "RECYCLE" of the three R'S means\_\_\_\_\_.
    - a) Reducing the quantity of waste we produce.
    - b) Converting used items into raw form and then making new products out of them.
    - c) Putting the waste product to other use.
    - d) Disposing more waste every day.

5. In the following flowchart of garbage disposal find the missing steps A and B.



1. B- Garbage collector, A- Dustbin
2. A-Truck sent by Municipal Corporation, B- Garbage collector
3. B-Dustbin, A- Garbage collector
4. A-Garbage collector, B- Truck sent by Municipal Corporation

6. Read the statements given below. Which among these is a false statement.

- a. We should say no to polythene.
- b. While shopping, we should always carry our own shopping bags such as plastic bags or polythene.
- c. Polythene and plastic are non-biodegradable wastes.
- d. We should take care of our environment.

**II. There are two statements marked as Assertion (A) and Reason (R). Mark your answer as per the options provided below: (1×2=2)**

1. **Assertion (A):** The twigs of neem tree are very good for the health of our teeth.

**Reason(R):** The medicinal properties of neem help to fight bacteria.

- a. Both Assertion (A) and Reason (R) are true and Reason (R) is the correct explanation of Assertion (A).
- b. Both Assertion (A) and Reason (R) are true and Reason (R) is not the correct explanation of Assertion (A).
- c. Assertion (A) is true but Reason (R) is false.
- d. Assertion (A) is false but Reason (R) is true.

2. **Assertion (A):** Kabadiwallas play an important role in recycling.

**Reason(R):** It is important to dispose waste carefully.

- a. Both Assertion (A) and Reason (R) are true and Reason (R) is the correct explanation of Assertion (A).
- b. Both Assertion (A) and Reason (R) are true and Reason (R) is not the correct explanation of Assertion (A).
- c. Assertion (A) is true but Reason (R) is false.
- d. Assertion (A) is false but Reason (R) is true.

**III. Define: (1×2= 2)**

- a. Compost pit
- b. Recycling loop

**IV. Answer the following (2×2= 4)**

1. Why should we dispose waste properly? (2 points)
2. Draw the labelled diagram of the tongue showing the taste buds.

**V. Answer in detail: (3×2=6)**

1. **Read the passage and answer the questions related to it.**

**Teeth helps us to bite, cut and chew different types of food. They also help in speaking. There are two sets of teeth in humans in lifetime. Children have milk teeth while adults have permanent teeth.**

- a. How many teeth do a child have when he/she is 3 years old?
- b. What happens if we do not brush our teeth properly? (2 points)
- c. How can we keep our teeth and gums healthy? (2 points)

2. Label the diagram of the teeth E, F, and G and state the functions of the same.

